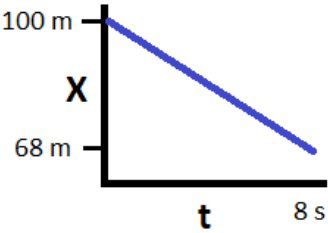
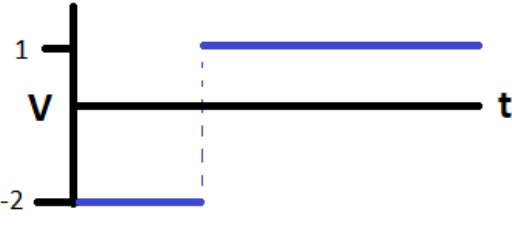
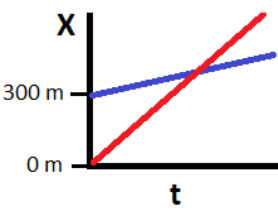
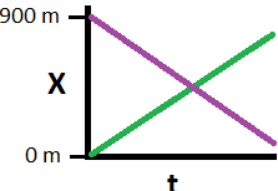


Answers (2.02 - Constant Velocity)

1	Graphs B and D
2	Graphs A and C
3	Graphs B and C
4	Graphs A and D
5	a) B and D b) A and C c) E d) E
6	 <p>a) $X = (-4 \text{ m/s})t + 100\text{m}$ c) 21 s</p>
7	 <p>a) b) -1 m</p>
4	 <p>a) b) 50 s</p>
5	 <p>a) b) 45 s</p>